

SGM INTERNATIONAL SCHOOL

Indira Nagar Kalyanpur, Kanpur

Practice Sheet (2020 – 2021)

Topic : Fun with Give and Take

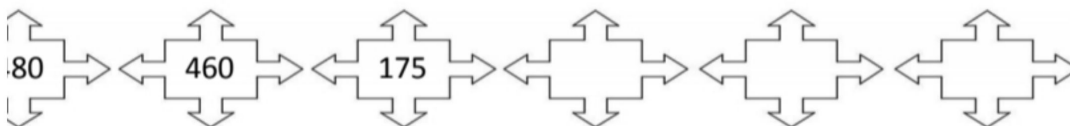

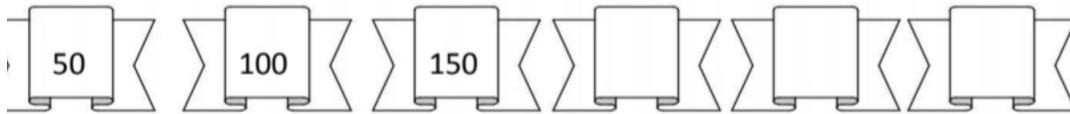


Date _____

WORK SHEET No.1

Month _____

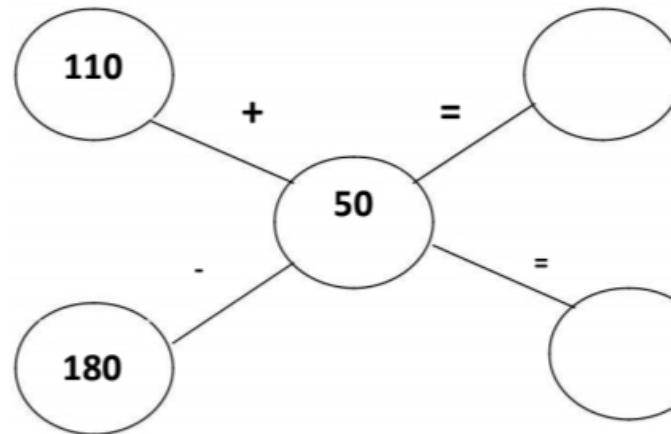
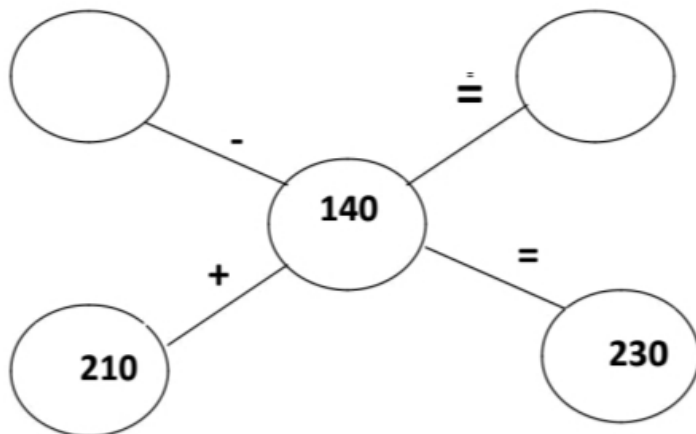
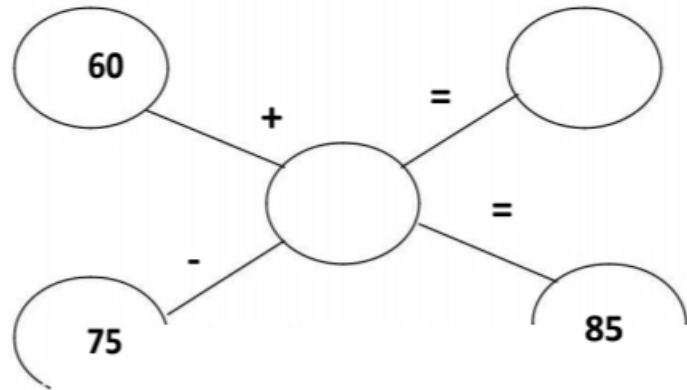
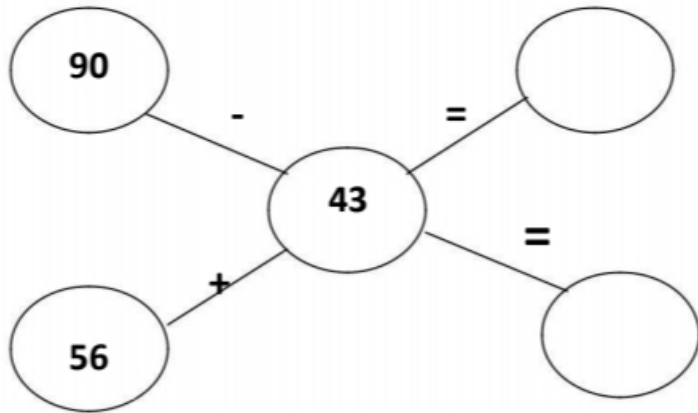
Competency: Understanding Basic Concepts

I. Find the missing numbers:



Competency: Ability to compute

I. Find the answers mentally:



Competency: Problem Solving Ability**I. Solve the following:**

1. Rakhi is 12 years old. Her mother is 38 years old. How much younger is Rakhi than her mother?

2. Sachin scored 186 runs in a test cricket match. How many more runs should he make to score a double century?

3. Raju bought a shirt for Rs. 135 and a trouser for Rs.189. how much money did he spend in all?

Competency: Ability to Compute

I. Check the subtraction answer using addition:

A)

2	4	5
1	3	2

B)

4	6	3
2	5	8

C)

8	5	3
2	8	4

D)

7	0	0
4	3	8

II. Solve the following:

$$\begin{array}{r} 18 \\ - 9 \\ \hline \\ \hline \end{array}$$

$$\begin{array}{r} 16 \\ - 8 \\ \hline \\ \hline \end{array}$$

$$\begin{array}{r} 25 \\ - 7 \\ \hline \\ \hline \end{array}$$

$$\begin{array}{r} 33 \\ - 17 \\ \hline \\ \hline \end{array}$$

$$\begin{array}{r} 235 \\ - 149 \\ \hline \\ \hline \end{array}$$

$$\begin{array}{r} 470 \\ - 368 \\ \hline \\ \hline \end{array}$$

$$\begin{array}{r} 500 \\ - 276 \\ \hline \\ \hline \end{array}$$

$$\begin{array}{r} 604 \\ - 457 \\ \hline \\ \hline \end{array}$$